
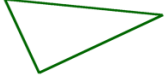
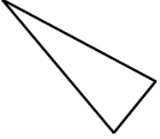







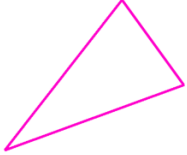

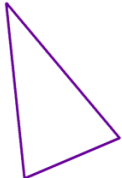
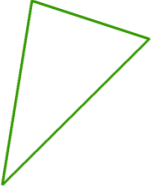



Classify Triangles Worksheet

Classify the triangles by their sides *and* angles (such as isosceles obtuse).

<p>1 a.</p> 	<p>1 b.</p> 	<p>1 c.</p> 
<p>2 a.</p> 	<p>2 b.</p> 	<p>2 c.</p> 
<p>3 a.</p> 	<p>3 b.</p> 	<p>3 c.</p> 
<p>4 a.</p> 	<p>4 b.</p> 	<p>4 c.</p> 
<p>5 a.</p> 	<p>5 b.</p> 	<p>5 c.</p> 

Answer Key

1 a. isosceles,
right

1 b. scalene, right

1 c. isosceles,
acute

2 a. scalene,
obtuse

2 b. isosceles,
acute

2 c. scalene, right

3 a. equilateral,
acute

3 b. isosceles,
obtuse

3 c. equilateral,
acute

4 a. scalene,
acute

4 b. isosceles,
acute

4 c. scalene, right

5 a. isosceles,
acute

5 b. scalene,
acute

5 c. isosceles,
right