

Name : \_\_\_\_\_

Score : \_\_\_\_\_

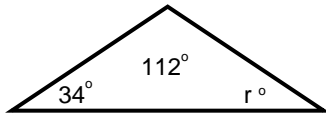
Teacher : \_\_\_\_\_

Date : \_\_\_\_\_

## Triangle Angle Sum

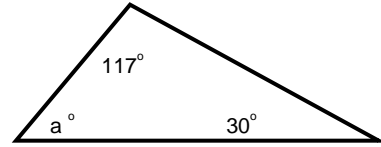
Solve for the given variable.

1)



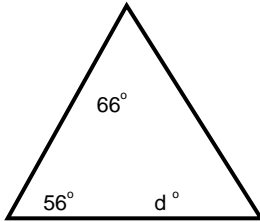
$$r = \underline{\hspace{2cm}}$$

5)



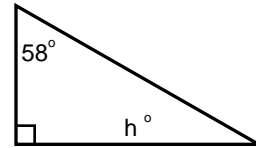
$$a = \underline{\hspace{2cm}}$$

2)



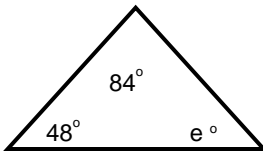
$$d = \underline{\hspace{2cm}}$$

6)



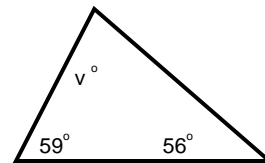
$$h = \underline{\hspace{2cm}}$$

3)



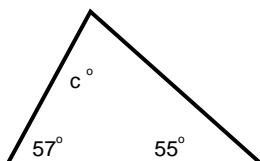
$$e = \underline{\hspace{2cm}}$$

7)



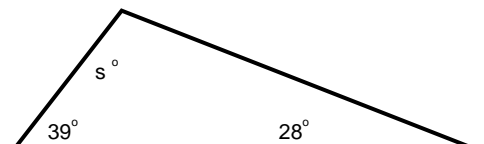
$$v = \underline{\hspace{2cm}}$$

4)



$$c = \underline{\hspace{2cm}}$$

8)



$$s = \underline{\hspace{2cm}}$$

