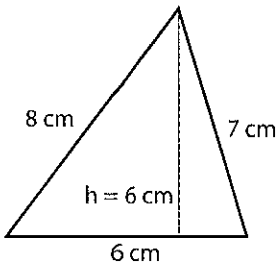


Perimeter and Area

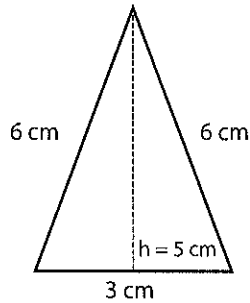
Name: _____ Class: _____

Find the area and perimeter of the following triangles (not drawn to scale).



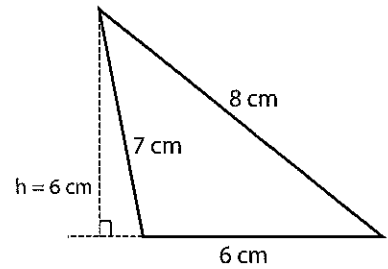
Perimeter: _____

Area: _____



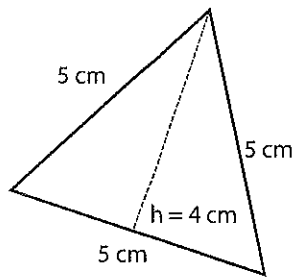
Perimeter: _____

Area: _____



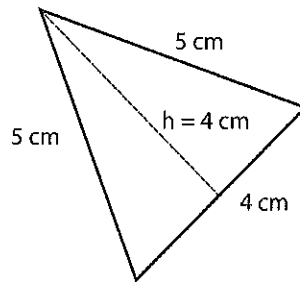
Perimeter: _____

Area: _____



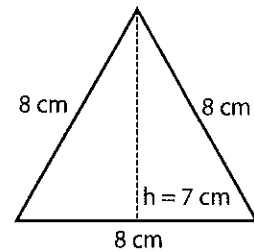
Perimeter: _____

Area: _____



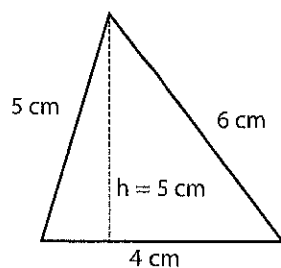
Perimeter: _____

Area: _____



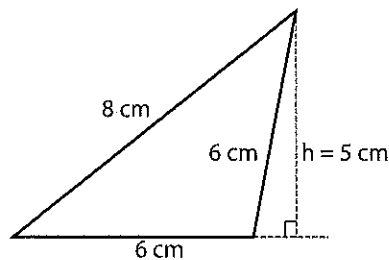
Perimeter: _____

Area: _____



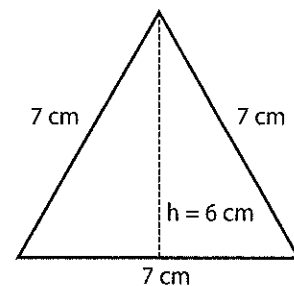
Perimeter: _____

Area: _____



Perimeter: _____

Area: _____



Perimeter: _____

Area: _____