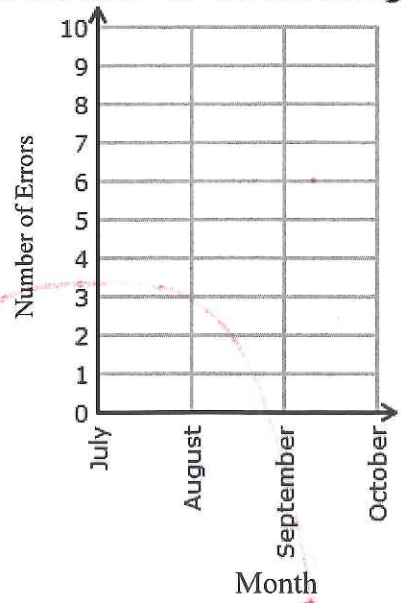


Directions: Plot the line graph

1 As part of an English assignment, Mateo counted the number of spelling errors made in The Bloomington Chronicle.

Spelling errors made in The Bloomington Chronicle	
Month	Number of errors
July	3
August	9
September	10
October	4

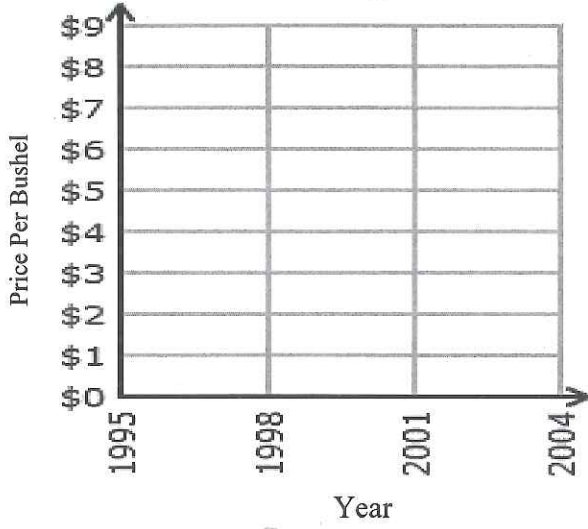
Spelling errors made in The Bloomington Chronicle



2 An agricultural research group tracked soybean prices over the years.

Price of soybeans	
Year	Price per bushel
1995	\$6
1998	\$6
2001	\$4
2004	\$8

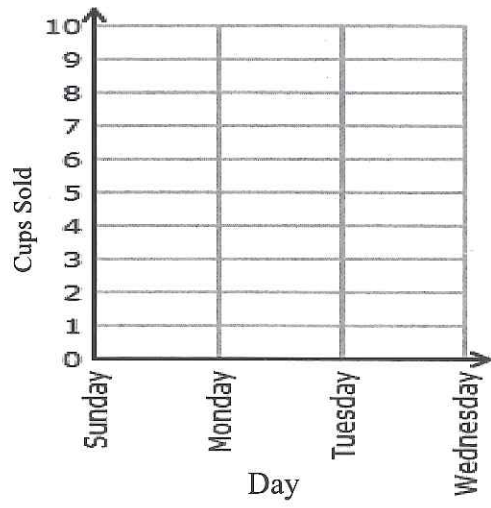
Price of soybeans



3 The manager of Tim Horton's counted the number of cups of coffee sold each day to determine the right amount of coffee beans to roast.

Coffee sales	
Day	Cups sold
Sunday	4
Monday	8
Tuesday	3
Wednesday	10

Coffee sales



Create a story that explains the line graph.  
Use your own units

④

