

Name : _____

Score : _____

Teacher : _____

Date : _____

Decimal Numbers on Number Lines

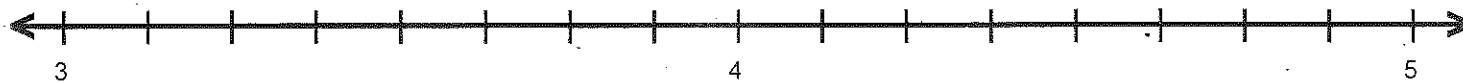


A = 1.5

B = 5.5

C = 4.5

D = 2.5



A = 3.375

B = 3.5

C = 4.625

D = 4.875

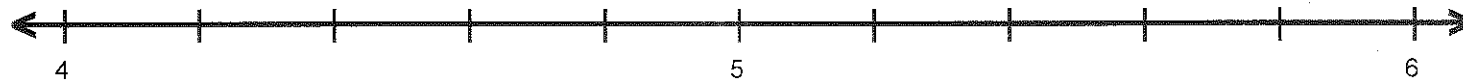


A = 5.5

B = 8.75

C = 6.25

D = 7.25

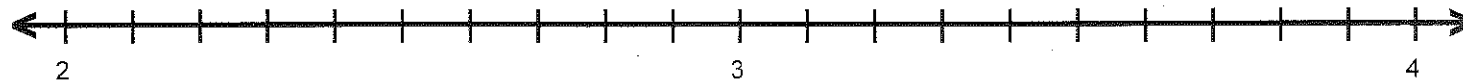


A = 4.8

B = 5.2

C = 4.4

D = 4.6



A = 2.1

B = 2.6

C = 3.5

D = 2.2

