


**Homework 1/30/19**


**Name:** \_\_\_\_\_

**Directions:** Use the grid to complete the multiplication problem. *Use colored pencils or different shades of your pencil to show the model.*




1)  $3 \times 0.2$  Area: \_\_\_\_\_




2)  $2 \times 0.5$  Area: \_\_\_\_\_




3)  $4 \times 0.3$  Area: \_\_\_\_\_



4)  $0.7 \times 0.2$  Area: \_\_\_\_\_



5)  $0.4 \times 0.3$  Area: \_\_\_\_\_



6)  $0.8 \times 0.3$  Area: \_\_\_\_\_

