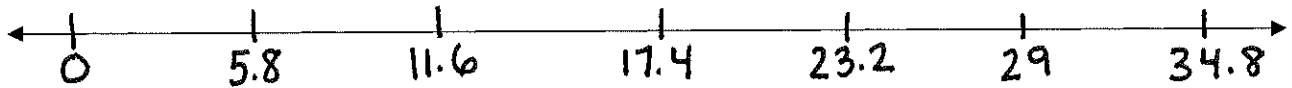


Name: _____

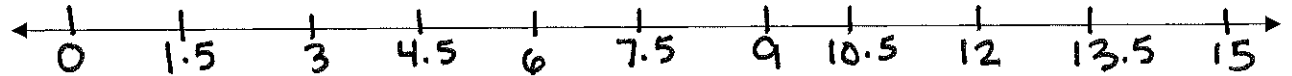
Homework 2/5

Directions: Use the number line to complete the division sentences.


1) $29 \div 5.8 = \underline{\hspace{2cm}}$



2) $12 \div 1.5 = \underline{\hspace{2cm}}$

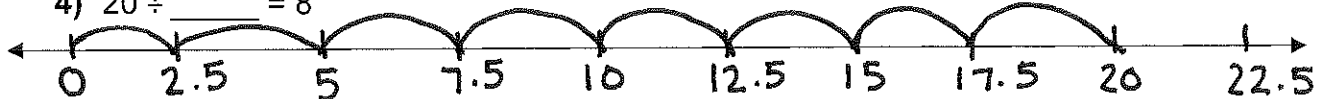


3) $17 \div 3.4 = \underline{\hspace{2cm}}$



Directions: Complete the division sentences that describes the number line model.

4) $20 \div \underline{\hspace{1cm}} = 8$



5) $7 \div 0.7 = \underline{\hspace{2cm}}$

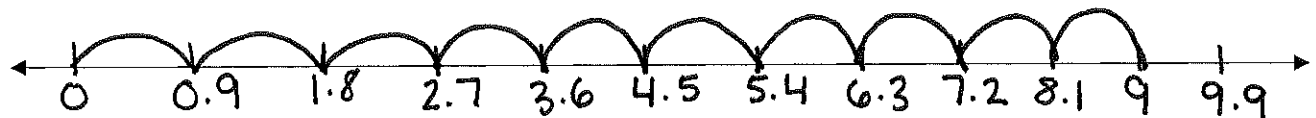


6) $\underline{\hspace{1cm}} \div 1.5 = 6$




Directions: Write the division sentence that describes the number line model.

7) $\underline{\hspace{1cm}} \div \underline{\hspace{1cm}} = \underline{\hspace{1cm}}$



8) $\underline{\hspace{1cm}} \div \underline{\hspace{1cm}} = \underline{\hspace{1cm}}$



9) $\underline{\hspace{1cm}} \div \underline{\hspace{1cm}} = \underline{\hspace{1cm}}$

