

Name: _____

Homework 4/9

Directions: Answer the review questions.

- 1) Which statement best describes the following numbers: 4, 7, 11, 15, 19, 21
- a. They are all prime numbers
 - b. They are all composite numbers
 - c. They are neither prime nor composite
 - d. Some are prime and some are composite

2) Ms. Smith made a quilt using different fabrics.

- $\frac{1}{2}$ was blue
- $\frac{2}{16}$ was yellow
- $\frac{1}{4}$ was green.

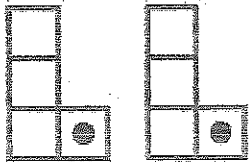
The rest of the quilt was polka-dot. What fraction of the quilt was polka-dot?

Remember to write your answer in simplest form. _____

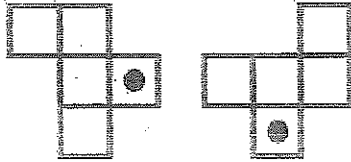
3) $2.3 \div 0.4 =$ _____

For the problems below, write Translation, Reflection, or Rotation.

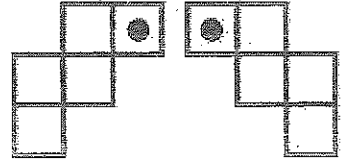
g.



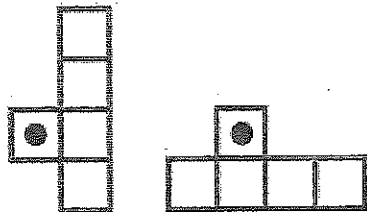
h.



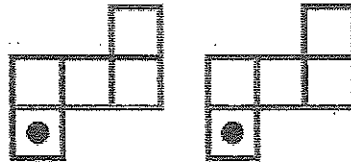
i.



j.



k.



l.

