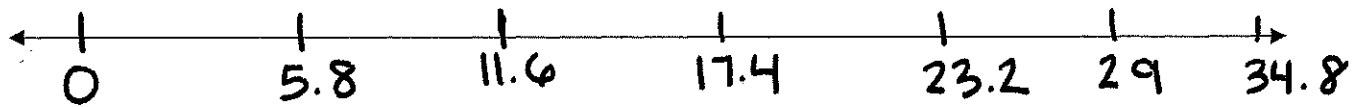


Name: _____

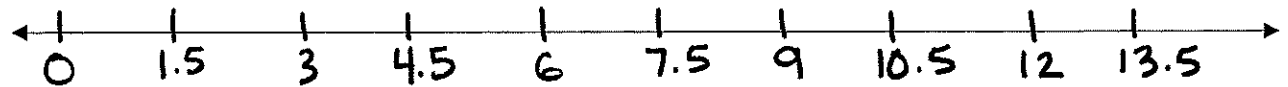
Homework 12/5

Directions: Use the number line to complete the division sentences.

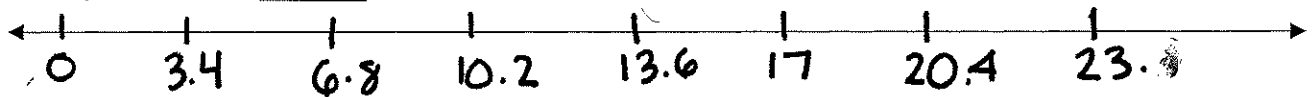
1) $29 \div 5.8 =$ _____



2) $12 \div 1.5 =$ _____



3) $17 \div 3.4 =$ _____



Directions: Complete the division sentences that describes the number line model.

4) $20 \div$ _____ $= 8$



5) $7 \div 0.7 =$ _____

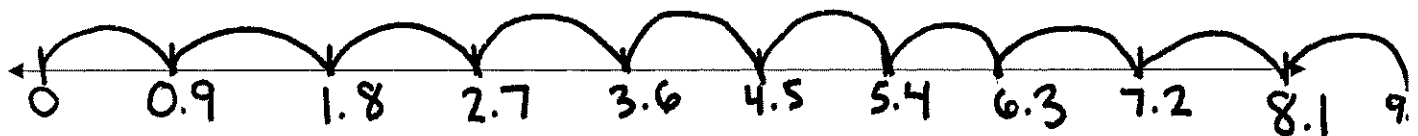


6) _____ $\div 1.5 = 6$



Directions: Write the division sentence that describes the number line model.

7) _____ \div _____ $=$ _____



8) _____ \div _____ $=$ _____



9) _____ \div _____ $=$ _____

