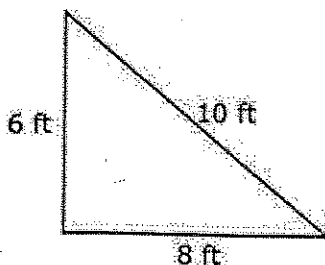
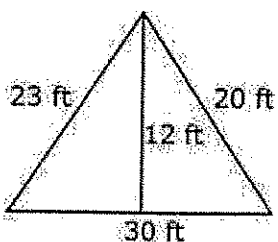


HW 3/9/20 Find the Area and Perimeter of Triangles Name:

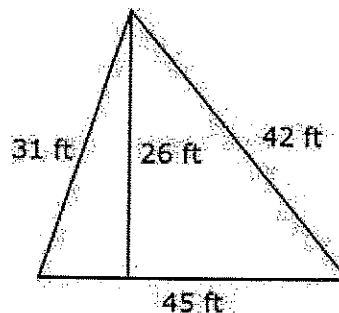
Using the given measurements, find the area and perimeter of each triangle.



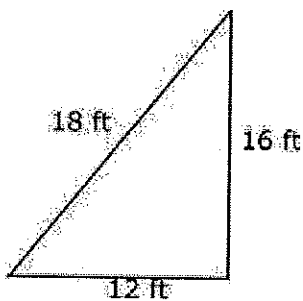
1. Area = ____
Perimeter = ____



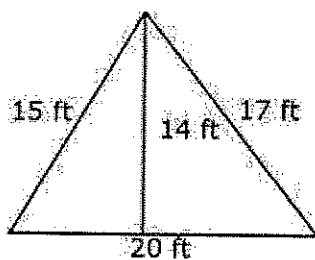
2. Area = ____
Perimeter = ____



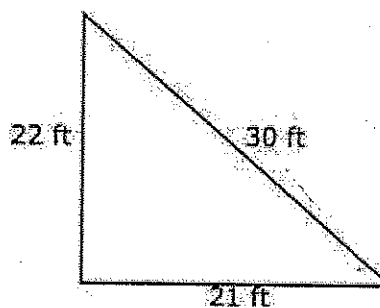
3. Area = ____
Perimeter = ____



4. Area = ____
Perimeter = ____

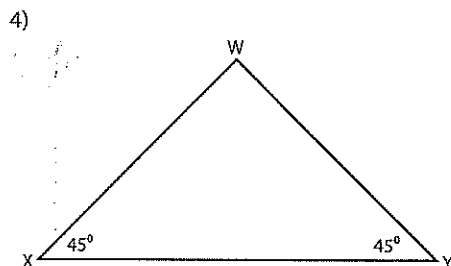


5. Area = ____
Perimeter = ____

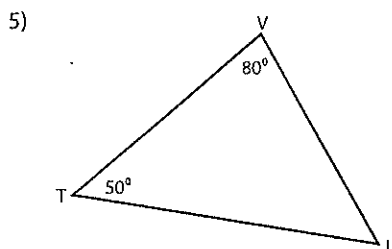


6. Area = ____
Perimeter = ____

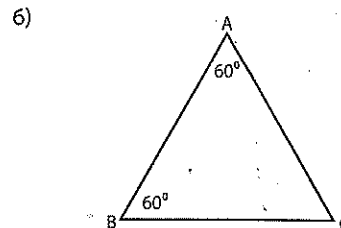
Directions: Find the value of the missing angle



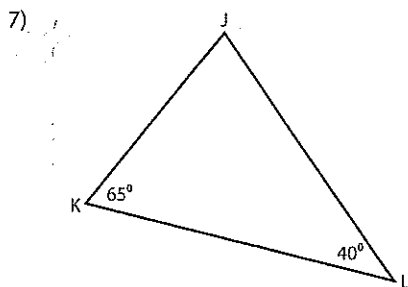
$\angle W =$



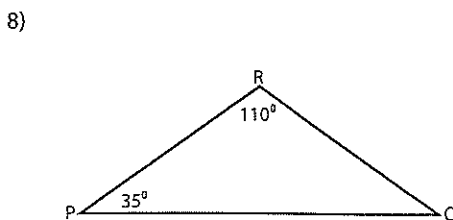
$\angle U =$



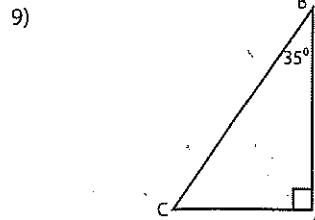
$\angle C =$



$\angle J =$



$\angle Q =$



$\angle C =$